
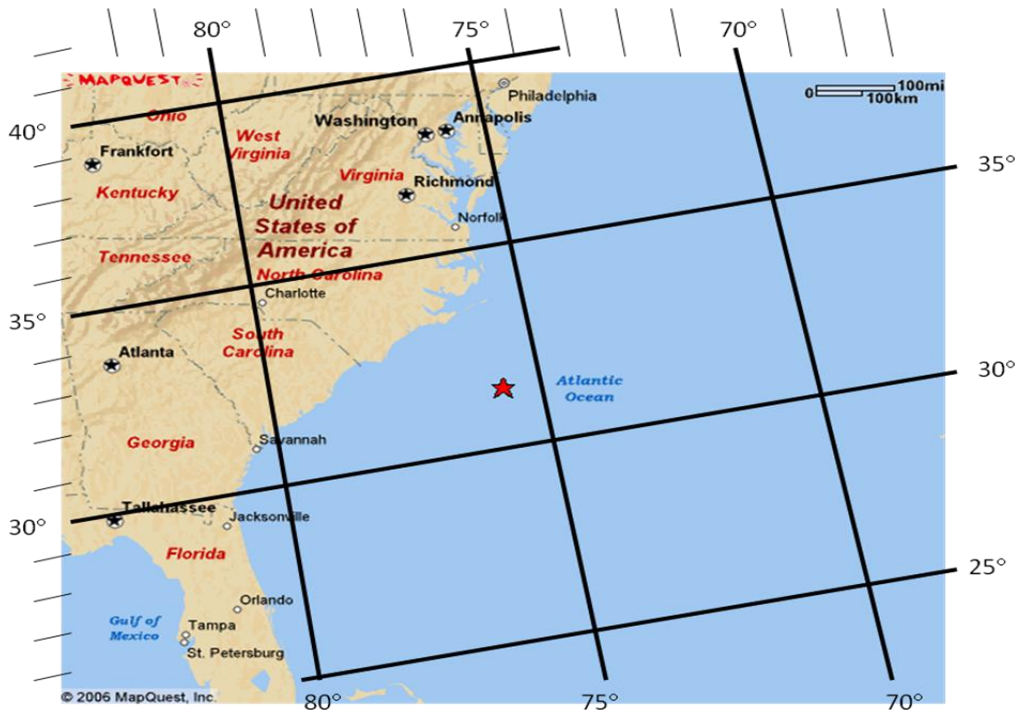


A Sea Turtle's Life Assessment

1. What species of sea turtle is indicated in this picture? Why did you choose that species?



2. On the map draw a migration path for a hatchling sea turtle. Explain why you drew that particular path for a hatchling sea turtle.



3. Pick three spots on the path, put a dot at those 3 spots and label them a, b, and c. List the latitude and longitude of those 3 spots below.

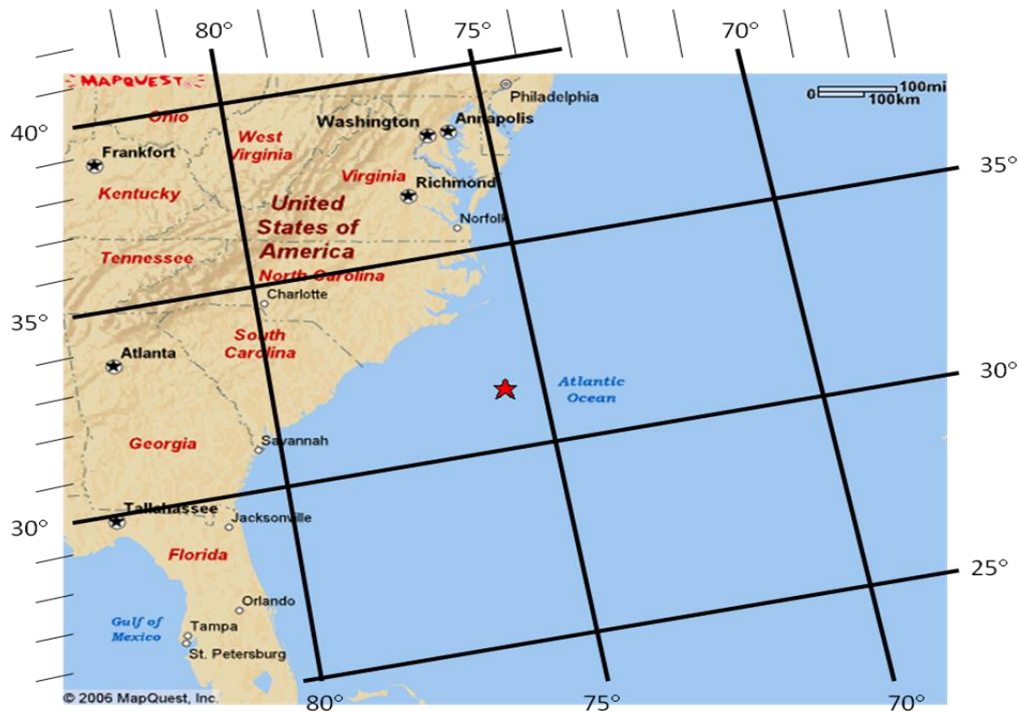
a. _____

b. _____

c. _____

A Sea Turtle's Life Assessment

4. On the map draw a migration path for an adult sea turtle. Explain why you drew that particular path for an adult sea turtle.



5. Pick three spots on the path, put a dot at those 3 spots and label them a, b, and c. List the latitude and longitude of those 3 spot below.

a. _____

b. _____

c. _____

6. Why is it important that scientists understand the life cycle of sea turtles?